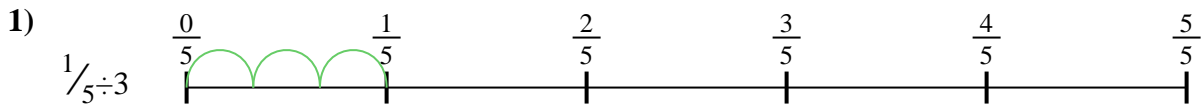


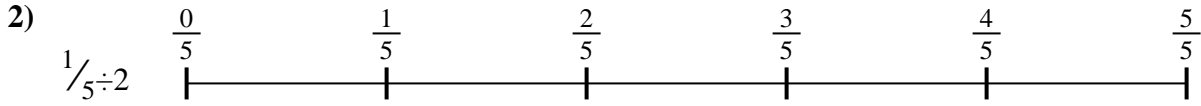


Use the numberline to solve each problem. The first is marked for you.


**Answers**




1. \_\_\_\_\_




2. \_\_\_\_\_



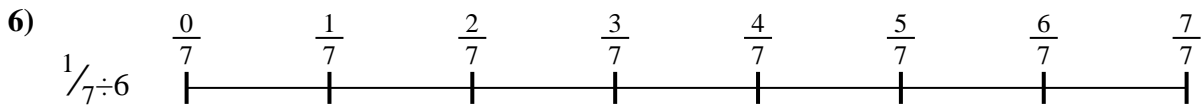
3. \_\_\_\_\_




4. \_\_\_\_\_



5. \_\_\_\_\_




6. \_\_\_\_\_



7. \_\_\_\_\_



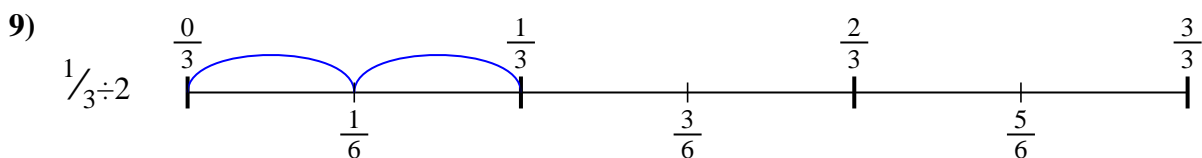
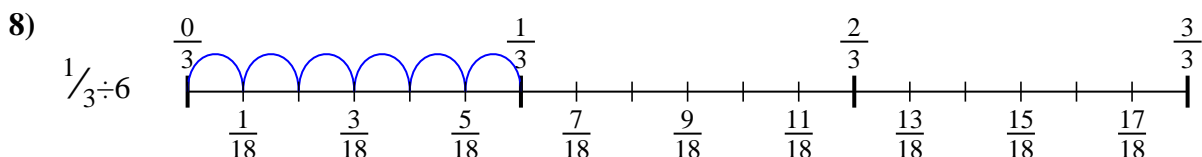
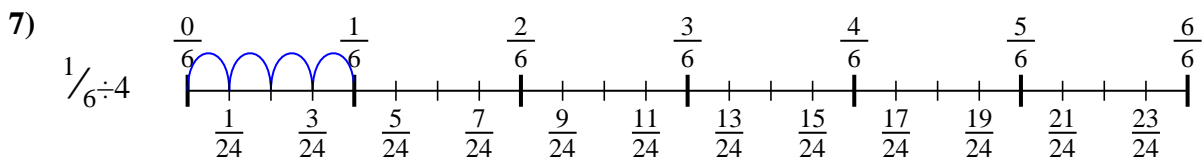
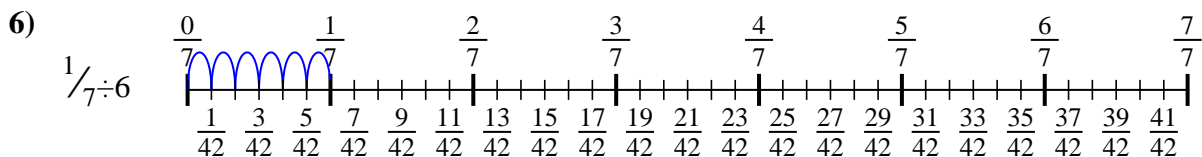
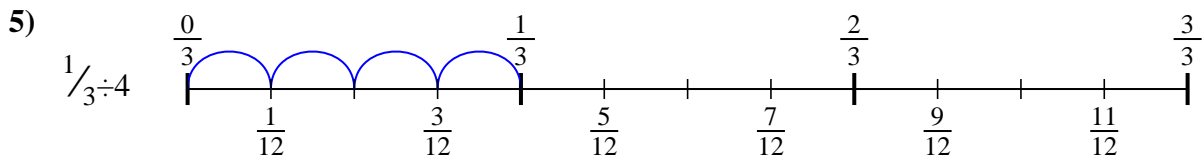
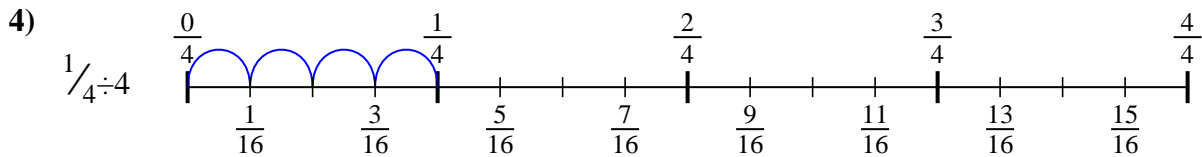
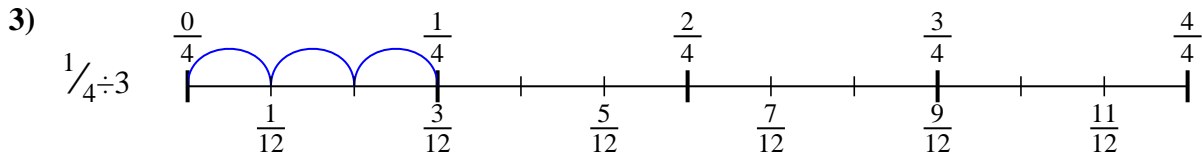
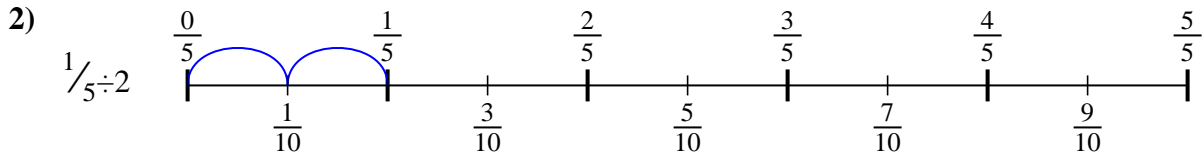
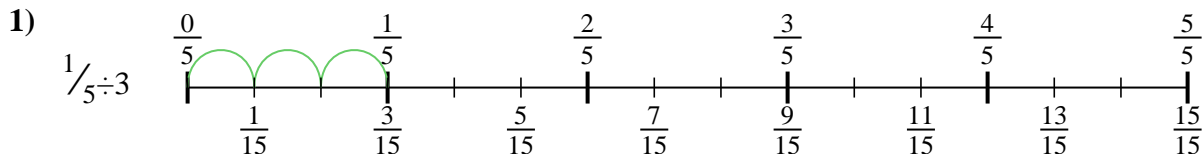
8. \_\_\_\_\_



9. \_\_\_\_\_



Use the numberline to solve each problem. The first is marked for you.



**Answers**

1.  $\frac{1}{15}$
2.  $\frac{1}{10}$
3.  $\frac{1}{12}$
4.  $\frac{1}{16}$
5.  $\frac{1}{12}$
6.  $\frac{1}{42}$
7.  $\frac{1}{24}$
8.  $\frac{1}{18}$
9.  $\frac{1}{6}$



Use the numberline to solve each problem. The first is marked for you.

**Answers**

$1/16$

$1/15$

$1/12$

$1/42$

$1/12$

$1/10$

$1/24$

$1/6$

$1/18$

1. \_\_\_\_\_

2. \_\_\_\_\_

3. \_\_\_\_\_

4. \_\_\_\_\_

5. \_\_\_\_\_

6. \_\_\_\_\_

7. \_\_\_\_\_

8. \_\_\_\_\_

9. \_\_\_\_\_

1)

2)

3)

4)

5)

6)

7)

8)

9)